



TABE Math-E

PAXEN

Unit-6 Geometry

Lesson 46

Area of Rectangles

Area = Length x Width

Revised: November 4, 2023

Nolan Tombouliau

Some graphics may not have copied well during the scan process.

Math-E - Lesson 46 – Area of Rectangles


Lesson 46 Area of Rectangles

3.MD.7.a – High, 3.MD.7.b – High

You can count the number of unit squares that cover a rectangle to find its area. You can also multiply the length by the width to find the area.

$$\text{Area} = \text{length} \times \text{width}$$

Example What is the area of this rectangle?



- 1) Find the length of the rectangle.
- 2) Find the width of the rectangle.
- 3) Multiply the length by the width to find the area of the rectangle.


$$\text{Length} = 6 \text{ units}$$

$$\text{Width} = 4 \text{ units}$$

$$6 \text{ units} \times 4 \text{ units} = 24 \text{ square units}$$

The area of the rectangle is 24 square units.

Example What is the area of this rectangle?



- 1) Find the length and width of the rectangle.
- 2) Multiply the length by the width to find the area of the rectangle.

$$\text{Length} = 8 \text{ in.}$$

$$\text{Width} = 2 \text{ in.}$$

$$8 \text{ in.} \times 2 \text{ in.} = 16 \text{ in.}^2$$

The area of the rectangle is 16 square inches.

Test Example

1. Rick's bedroom is 8 feet wide and 10 feet long. What is the area of his bedroom?
A. 40 feet B. 80 feet
C. 40 square feet D. 80 square feet

1. D $8 \text{ feet} \times 10 \text{ feet} = 80 \text{ square feet}$

Hint

Remember that area is always given in square units.

Math-E - Lesson 46 – Area of Rectangles

Practice

Read each question. Select the correct answer.

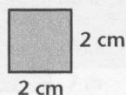
1 Jan painted a wall that is 9 feet high and 11 feet long. What is the area of the wall?

- A. 81 square feet
- B. 90 square feet
- C. 99 square feet
- D. 100 square feet

2 Sue has a rug that is 5 feet wide and 8 feet long. What is the area of the rug?


- A. 16 square feet
- B. 40 square feet
- C. 58 square feet
- D. 85 square feet

3 What is the area of this square?



- A. 4 square centimeters
- B. 6 square centimeters
- C. 8 square centimeters
- D. 10 square centimeters

4 What is the area of this square?




- A. 5 square yards
- B. 10 square yards
- C. 20 square yards
- D. 25 square yards

5 Ian wants to buy carpeting for his living room. The room is 9 feet wide by 9 feet long. How much carpeting should Ian buy?

- A. 24 square feet
- B. 48 square feet
- C. 81 square feet
- D. 90 square feet

6 What is the area of this rectangle?



- A. 27 square meters
- B. 36 square meters
- C. 45 square meters
- D. 54 square meters

7 Ted has a garden that is 7 feet long and 8 feet wide. What is the area of the garden?

- A. 56 square feet
- B. 63 square feet
- C. 64 square feet
- D. 72 square feet

8 Jai has 48 bathroom floor tiles that are each 1 square foot. What size bathroom floor could Jai cover?

- A. 4 feet wide by 8 feet long
- B. 6 feet wide by 8 feet long
- C. 7 feet wide by 8 feet long
- D. 8 feet wide by 8 feet long

Math-E - Lesson 46 – Area of Rectangles

Lesson 46

Area of Rectangles

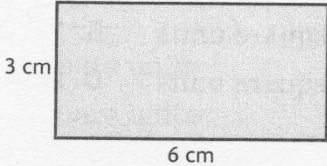
1. C. $9 \times 11 = 99$ square feet
2. B. $5 \times 8 = 40$ square feet
3. A. $2 \times 2 = 4$ square centimeters
4. D. $5 \times 5 = 25$ square yards
5. C. $9 \times 9 = 81$ square feet
6. B. $4 \times 9 = 36$ square meters
7. A. $7 \times 8 = 56$ square feet
8. B. 6 feet wide by 8 feet long

Math-E - Practice 46 – Area of Rectangles

Practice 46

Area of Rectangles

3.MD.7.a – High; 3.MD.7.b – High

- 1 A hockey goal is six feet wide and four feet tall. What is the area of the opening of a hockey goal?
- A. 64 ft^2
 - B. 46 ft^2
 - C. 24 ft^2
 - D. 10 ft^2
- 2 A highway billboard is 15 meters wide and 6 meters high. What is the area of the billboard?
- A. 12 m^2
 - B. 21 m^2
 - C. 42 m^2
 - D. 90 m^2
- 3 Ramone pours concrete as a base for his new shed. The concrete base is seven feet long and five feet wide. What is the area of the concrete base?
- A. 12 ft^2
 - B. 24 ft^2
 - C. 35 ft^2
 - D. 53 ft^2
- 4 Pacita buys a rectangular pool covering for her in-ground pool. It is eight meters long and six meters wide. What is the area of the pool covering?
- A. 56 m^2
 - B. 48 m^2
 - C. 28 m^2
 - D. 14 m^2
- 5 The bottom of Dawn's tent is five feet long and six feet wide. What is the area of the bottom of Dawn's tent?
- A. 30 ft^2
 - B. 25 ft^2
 - C. 22 ft^2
 - D. 11 ft^2
- 6 Shaquana creates a mosaic using tiles that each have an area of 1 square centimeter. She uses 36 tiles. What are two possible sizes for the mosaic that Shaquana creates?
- A. 9 cm wide by 4 cm long
 - B. 10 cm wide by 3 cm long
 - C. 11 cm wide by 4 cm long
 - D. 12 cm wide by 3 cm long
 - E. 13 cm wide by 4 cm long
 - F. 14 cm wide by 3 cm long
- 7 Matthew mops a dining hall after a banquet. The dining hall measures 11 yards long and 8 yards wide. How many square yards does Matthew mop?
- A. 19 yd^2
 - B. 38 yd^2
 - C. 88 yd^2
 - D. 108 yd^2
- 8 What is the area of the rectangle?
- 
- A rectangle is shown with a vertical side labeled "3 cm" and a horizontal side labeled "6 cm".
- A. 24 cm^2
 - B. 18 cm^2
 - C. 12 cm^2
 - D. 9 cm^2
- 9 Chatan cleans the glass of the seahorse exhibit at the aquarium. The glass is four feet long and three feet high. How many square feet of glass does Chatan clean?
- A. 21 ft^2
 - B. 18 ft^2
 - C. 14 ft^2
 - D. 12 ft^2

Math-E - Practice 46 – Area of Rectangles

- 10 Pablo places a checkered tablecloth on a picnic table. There are 32 squares each measuring 1 square foot on the tablecloth. What is the size of the tablecloth?

A. 4 ft long by 6 ft wide
B. 4 ft long by 7 ft wide
C. 8 ft long by 4 ft wide
D. 8 ft long by 3 ft wide


- 11 Ulan mows his backyard, which is eight yards long and seven yards wide. How many square yards does Ulan mow?

A. 65 yd²
B. 56 yd²
C. 30 yd²
D. 15 yd²

- 12 Kendy buys a postcard that is four inches long and five inches wide. What is the area of the postcard?

A. 22 in.²
B. 20 in.²
C. 18 in.²
D. 9 in.²

- 13 What is the area of the square?



A. 49 m²
B. 35 m²
C. 28 m²
D. 14 m²

- 14 Carrie uses 60 squares of fabric to make a quilt. Each square has an area of 1 square foot. What are two possible sizes of Carrie's quilt?

A. 10 ft long by 3 ft wide
B. 11 ft long by 4 ft wide
C. 12 ft long by 5 ft wide
D. 13 ft long by 5 ft wide
E. 14 ft long by 3 ft wide
F. 15 ft long by 4 ft wide

- 15 Kofi and Danika have a mural of their favorite memories painted to celebrate their 60th wedding anniversary. The mural has a length of five yards and a width of three yards. What is the area of the mural?

A. 8 yd²
B. 11 yd²
C. 12 yd²
D. 15 yd²

- 16 Idania receives a plaque in recognition of her volunteer service. It is 12 inches long and 8 inches wide. What is the area of the plaque?

A. 104 in.²
B. 96 in.²
C. 69 in.²
D. 40 in.²

- 17 Koko buys a throw rug for her living room floor. The rug is 15 feet long and 9 feet wide. What is the area of the rug?

A. 135 ft²
B. 126 ft²
C. 120 ft²
D. 112 ft²

- 18 A rectangular mirror is eight feet long and three feet wide. What is the area of the mirror?

A. 18 ft²
B. 21 ft²
C. 24 ft²
D. 32 ft²

Math-E - Practice 46 – Area of Rectangles

Practice 46

Area of Rectangles

pp. 34–35

(3.MD.7.a; 3.MD.7.b)

1. C. $6 \times 4 = 24 \text{ ft}^2$; The area of the opening of the hockey goal is 24 ft^2 .
2. D. $15 \times 6 = 90 \text{ m}^2$; The area of the billboard is 90 m^2 .
3. C. $7 \times 5 = 35 \text{ ft}^2$; The area of the concrete base is 35 ft^2 .
4. B. $8 \times 6 = 48 \text{ m}^2$; The area of the pool covering is 48 m^2 .
5. A. $5 \times 6 = 30 \text{ ft}^2$; The area of the bottom of Dawn's tent is 30 ft^2 .
6. A, D. A mosaic made of 36 one-centimeter tiles would have an area of 36 cm^2 , so the product of the length and width must be 36: $9 \times 4 = 36$ and $12 \times 3 = 36$. Two possible sizes of the mosaic are 9 cm wide by 4 cm long and 12 cm wide by 3 cm long.
7. C. $11 \times 8 = 88 \text{ yd}^2$; Matthew mops an area of 88 yd^2 .
8. B. $6 \times 3 = 18 \text{ cm}^2$; The area of the rectangle is 18 cm^2 .
9. D. $4 \times 3 = 12 \text{ ft}^2$; Chatan cleans 12 ft^2 of glass.
10. C. A tablecloth with 32 one-foot squares would have an area of 32 ft^2 , so the product of the length and width must be 32: $8 \times 4 = 32$. The tablecloth is 8 ft long by 4 ft wide.
11. B. $8 \times 7 = 56 \text{ yd}^2$; Ulan mows an area of 56 yd^2 .
12. B. $4 \times 5 = 20 \text{ in.}^2$; The area of the postcard is 20 in.^2 .
13. A. $7 \times 7 = 49 \text{ m}^2$; The area of the square is 49 m^2 .
14. C, F. A quilt made of 60 one-foot squares would have an area of 60 ft^2 , so the product of the length and width must be 60: $12 \times 5 = 60$ and $15 \times 4 = 60$. Two possible sizes for Carrie's quilt are 12 ft long by 5 ft wide and 15 ft long by 4 ft wide.
15. D. $5 \times 3 = 15 \text{ yd}^2$; The area of the mural is 15 yd^2 .
16. B. $12 \times 8 = 96 \text{ in.}^2$; The area of the plaque is 96 in.^2 .
17. A. $15 \times 9 = 135 \text{ ft}^2$; The area of the rug is 135 ft^2 .
18. C. $8 \times 3 = 24 \text{ ft}^2$; The area of the mirror is 24 ft^2 .